





DISSECT OWL PELLETS

Record what you have found in the owl pellet in the chart below. Sketch out the bone in the drawing section and then identify its name in the next section. Count the number of each type of bone you find and record it below the name. When you are finished, answer the questions at the bottom of the page.

	DRAWING OF THE BONE	Bone Name: _____ _____ _____
	Number Found: _____	

	DRAWING OF THE BONE	Bone Name: _____ _____ _____
	Number Found: _____	

	DRAWING OF THE BONE	Bone Name: _____ _____ _____
	Number Found: _____	

	DRAWING OF THE BONE	Bone Name: _____ _____ _____
	Number Found: _____	

- What bone did you find in the largest quantity? _____
- What does this pellet tell you about the owl's diet? _____

- Sketch out the food chain for this owl in the space below. Label the animals with their level in the food chain (that is, *producer*, *primary consumer*, *secondary consumer*, or *tertiary consumer*).